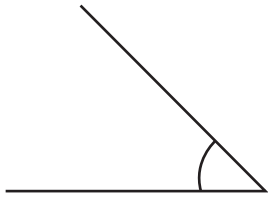


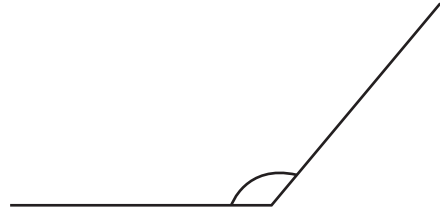
Name _____

Measuring Angles

Use a protractor of your own to measure the angles below.



1. _____



2. _____



All Kids
NETWORK

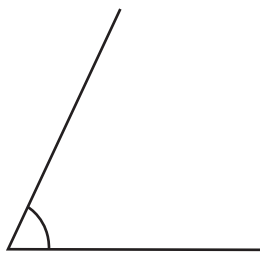
PREVIEW

Please login or register to download the printable version of this worksheet.

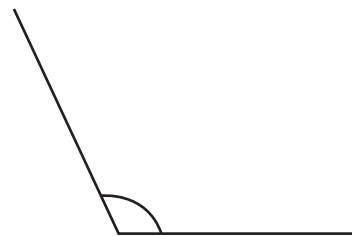
www.allkidsnetwork.com

3. _____

4. _____



5. _____

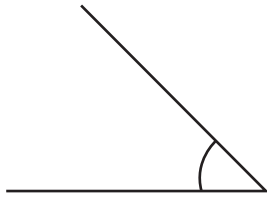


6. _____

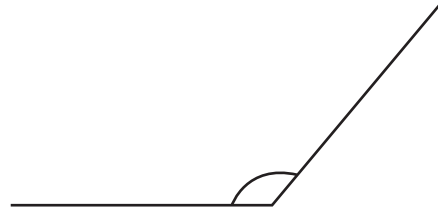
Name _____

Measuring Angles

Use a protractor of your own to measure the angles below.



1. 45°



2. 130°



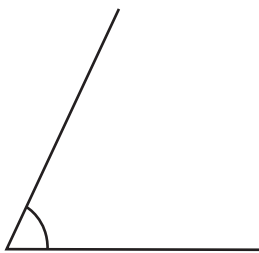
PREVIEW

Please login or register to download the printable version of this worksheet.

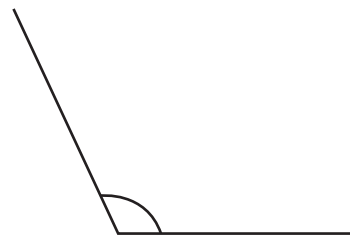
www.allkidsnetwork.com

3. 10°

4. 10°



5. 65°



6. 115°