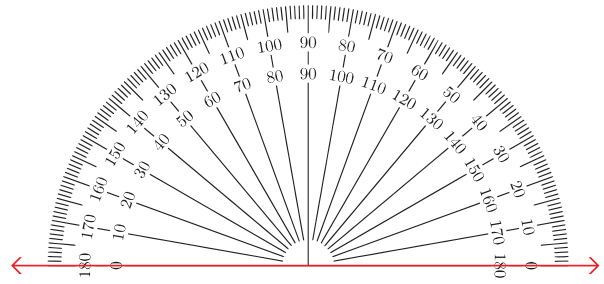
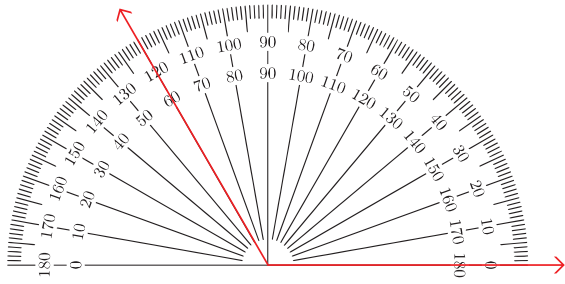


Reading a Protractor

Measure and write down each angle below using the protractor. The first one has been done for you as an example.





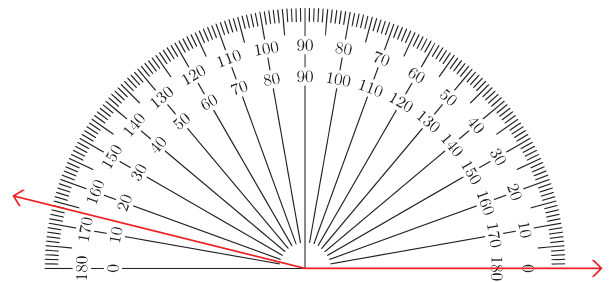
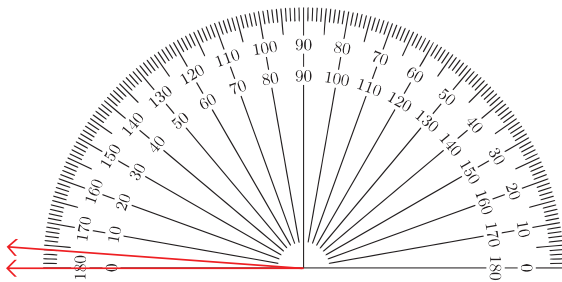
PREVIEW

Please login or register to download
the printable version of this worksheet.

www.allkidsnetwork.com

3. _____

4. _____

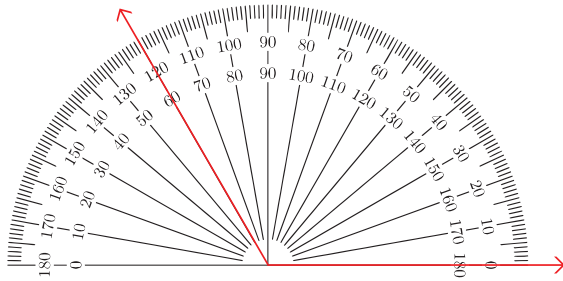
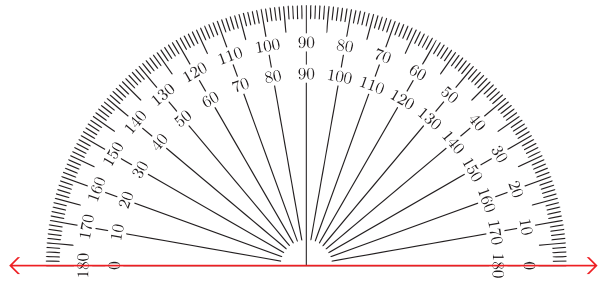


5. _____

6. _____

Reading a Protractor

Measure and write down each angle below using the protractor. The first one has been done for you as an example.

1. 120° 2. 100°

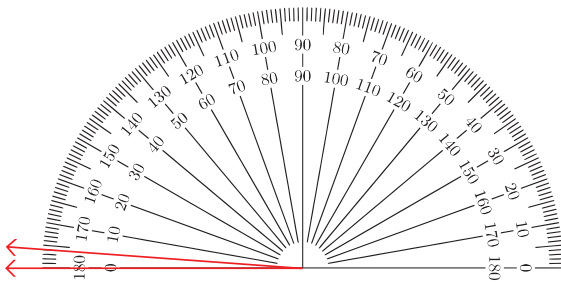
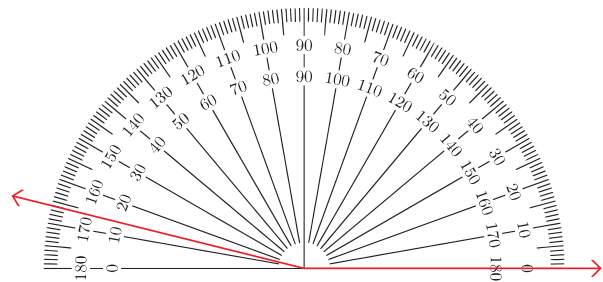


All Kids
NETWORK

PREVIEW

Please login or register to download
the printable version of this worksheet.

www.allkidsnetwork.com

3. _____ 92° 4. _____ 57° 5. _____ 4° 6. _____ 166°