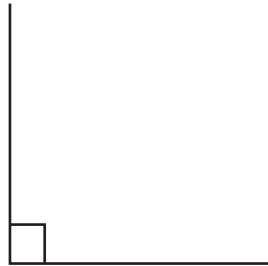


Name _____

What angle is it?

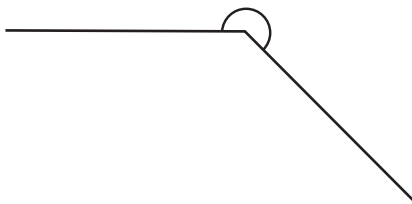
Measure each angle with the use of a protractor, then write down what type of angle it is.



PREVIEW

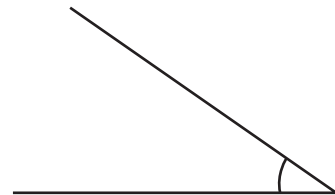
Please login or register to download the printable version of this worksheet.

www.allkidsnetwork.com



Angle: _____

Type: _____

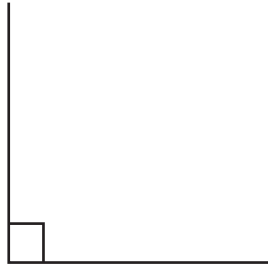


Angle: _____

Type: _____

What angle is it?

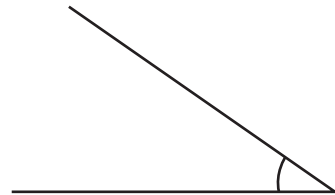
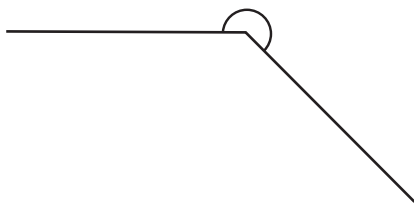
Measure each angle with the use of a protractor, then write down what type of angle it is.



PREVIEW

Please login or register to download the printable version of this worksheet.

www.allkidsnetwork.com



Angle: 225°

Type: Reflex Angle

Angle: 35°

Type: Acute Angle