
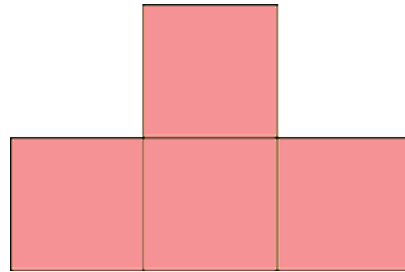


What is Area?

Area is the size of a surface. Use the grid as a reference, what are the areas of these shapes below? ($1\text{ square} = 1\text{ unit}^2$.)



example: The area of this shape is 3 unit^2 .



1. The area of this shape is _____ unit^2 .

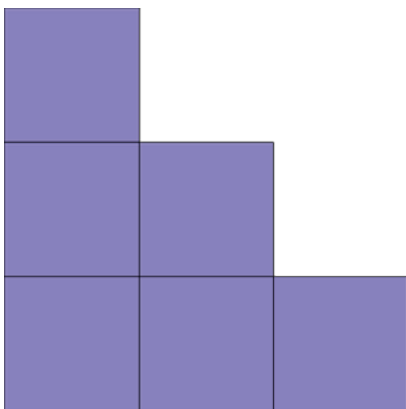


PREVIEW

Please login or register to download the printable version of this worksheet.

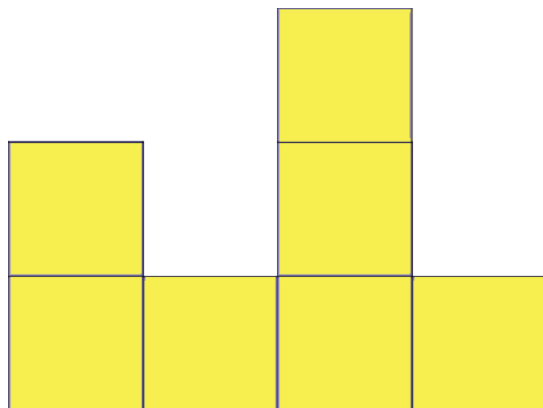
www.allkidsnetwork.com

2. The area of this shape is _____ unit^2 .



4. This area of this shape is _____ unit^2 .


3. The area of this shape is _____ unit^2 .



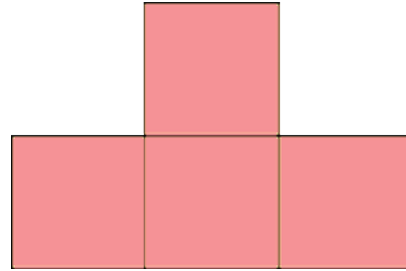
5. This area of this shape is _____ unit^2 .

What is Area?

Area is the size of a surface. Use the grid as a reference, what are the areas of these shapes below? ($1\text{ square} = 1\text{ unit}^2$.)



example: The area of this shape is 3 unit².



1. The area of this shape is 4 unit².

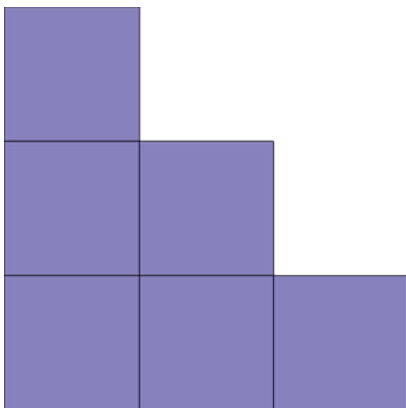


PREVIEW

Please login or register to download the printable version of this worksheet.

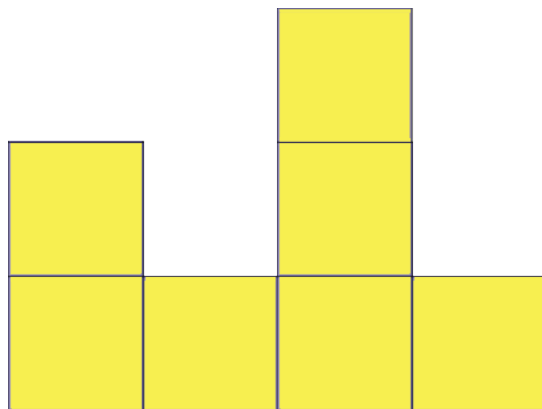
www.allkidsnetwork.com

2. The area of this shape is 6 unit².



4. This area of this shape is 6 unit².

3. The area of this shape is 4 unit².



5. This area of this shape is 7 unit².