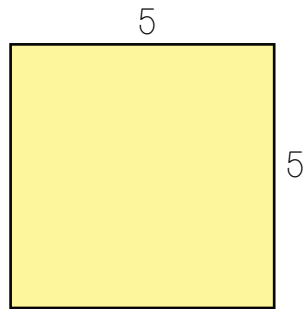


What is Perimeter?

Perimeter is the distance around a 2-dimensional shape. If you know the length of the sides, you can add them all up, and calculate the perimeter.

example:



The perimeter of this square:

$$5+5+5+5$$

$$= 20$$

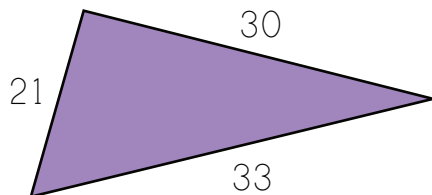


PREVIEW

Please login or register to download the printable version of this worksheet.

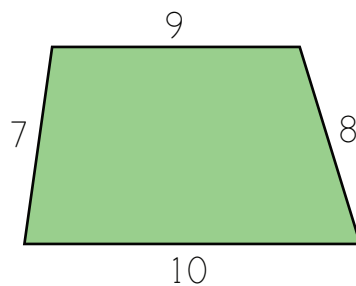
www.allkidsnetwork.com

2.



The perimeter of this triangle:

3.

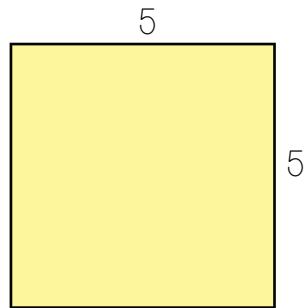


The perimeter of this trapezoid:

What is Perimeter?

Perimeter is the distance around a 2-dimensional shape. If you know the length of the sides, you can add them all up, and calculate the perimeter.

example:



The perimeter of this square:

$$5+5+5+5$$

$$= 20$$

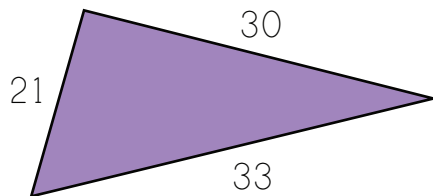


PREVIEW

Please login or register to download the printable version of this worksheet.

www.allkidsnetwork.com

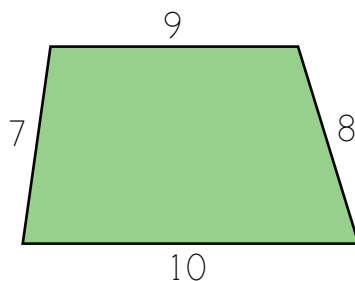
2. The perimeter of this triangle:



$$21+30+33$$

$$= 84$$

3.



The perimeter of this trapezoid:

$$7+8+9+10$$

$$= 34$$