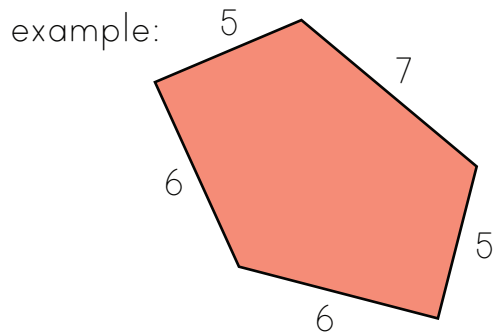


# What is Perimeter?

Perimeter is the distance around a 2-dimensional shape. If you know the length of the sides, you can add them all up, and calculate the perimeter.



The perimeter of this polygon:

$$5+5+6+6+7$$

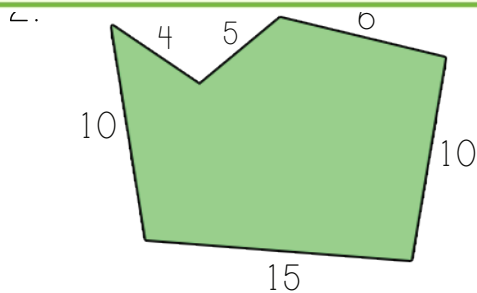
$$= 29$$



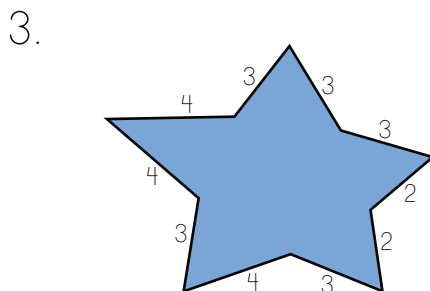
## PREVIEW

Please login or register to download the printable version of this worksheet.

[www.allkidsnetwork.com](http://www.allkidsnetwork.com)



The perimeter of this polygon:

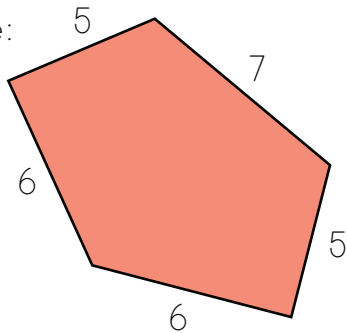


The perimeter of this star shape:

# What is Perimeter?

Perimeter is the distance around a 2-dimensional shape. If you know the length of the sides, you can add them all up, and calculate the perimeter.

example:



The perimeter of this polygon:

$$5+5+6+6+7$$

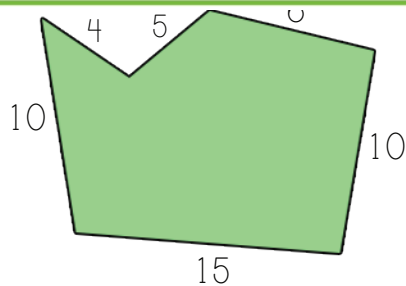
$$= 29$$



## PREVIEW

Please login or register to download the printable version of this worksheet.


[www.allkidsnetwork.com](http://www.allkidsnetwork.com)



$$4+5+6+10+15+10$$

$$= 50$$

3.



The perimeter of this star shape:

$$2+2+3+3+3+3+3+4+4+4$$

$$= 31$$