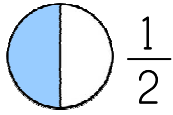


Name: _____

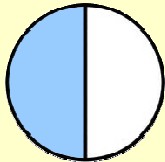
Date: _____



Math Worksheets

Fractions Worksheet

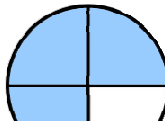
Circle the correct answer in each section. The first one is done for you.



$\frac{1}{2}$

$\frac{1}{3}$

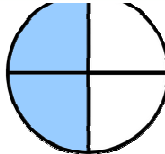
$\frac{1}{4}$



$\frac{2}{2}$

$\frac{3}{5}$

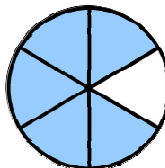
$\frac{3}{11}$

**PREVIEW**Please login or register to download
the printable version of this worksheet.www.allkidsnetwork.com

$\frac{2}{4}$

$\frac{3}{4}$

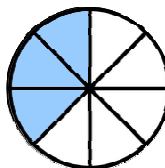
$\frac{2}{5}$



$\frac{4}{6}$

$\frac{5}{6}$

$\frac{5}{8}$



$\frac{2}{8}$

$\frac{3}{8}$

$\frac{3}{6}$