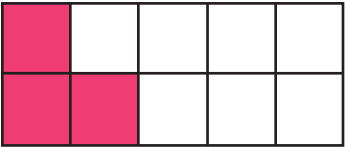


Name _____

Fraction, Decimal, Percentage

Look carefully at the given models and complete the table below. The first one has been done as an example.



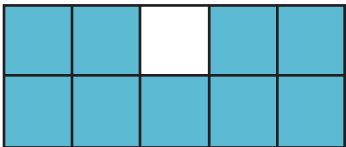
Model	Fraction	Decimal	Percentage
	$\frac{3}{10}$	0.3	30%



PREVIEW

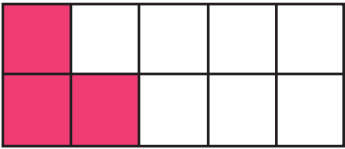


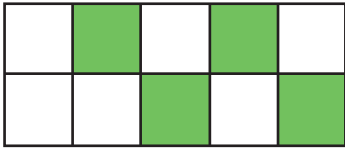
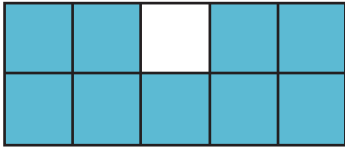
Please login or register to download the printable version of this worksheet.

www.allkidsnetwork.com

Fraction, Decimal, Percentage

Look carefully at the given models and complete the table below. The first one has been done as an example.

Model	Fraction	Decimal	Percentage
	$\frac{3}{10}$	0.3	30%
<div data-bbox="267 909 678 1167">  </div> <div data-bbox="756 921 1347 1014"> <h2>PREVIEW</h2> </div> <div data-bbox="753 1031 1354 1115"> <p>Please login or register to download the printable version of this worksheet.</p> </div> <div data-bbox="812 1127 1302 1169"> <p>www.allkidsnetwork.com</p> </div>			
	$\frac{10}{10}$		
	$\frac{4}{10}$	0.4	40%
	$\frac{9}{10}$	0.9	90%