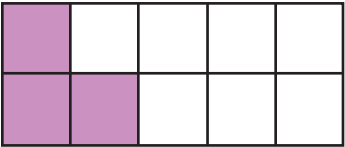


Name _____

Fraction, Decimal, Percentage

Look carefully at the given models and complete the table below. The first one has been done as an example.


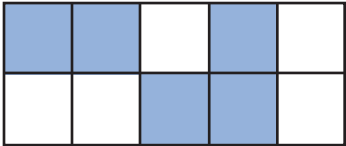
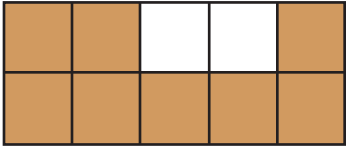
Model	Fraction	Decimal	Percentage
	$\frac{3}{10}$	0.3	30%



PREVIEW

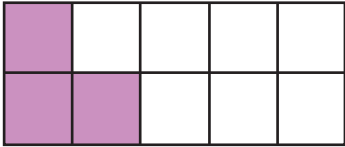


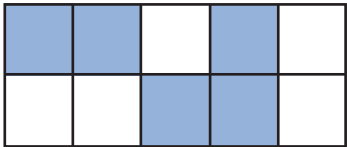
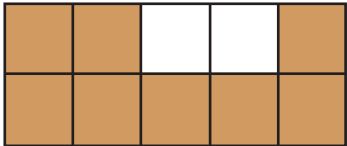
Please login or register to download the printable version of this worksheet.

www.allkidsnetwork.com

Fraction, Decimal, Percentage

Look carefully at the given models and complete the table below. The first one has been done as an example.

Model	Fraction	Decimal	Percentage
	$\frac{3}{10}$	0.3	30%
<div data-bbox="267 911 680 1169">  </div> <div data-bbox="755 926 1352 1018"> <h2>PREVIEW</h2> </div> <div data-bbox="751 1033 1359 1117"> <p>Please login or register to download the printable version of this worksheet.</p> </div> <div data-bbox="812 1129 1304 1171"> <p>www.allkidsnetwork.com</p> </div>			
	$\frac{1}{10}$		
	$\frac{5}{10}$	0.5	50%
	$\frac{8}{10}$	0.8	80%