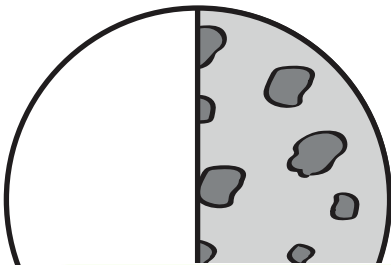


Name \_\_\_\_\_

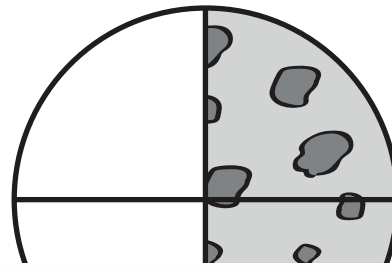
# Food Fractions

Write the correct number for the numerator and denominator.

1.


$$\frac{\square}{\square}$$

2.

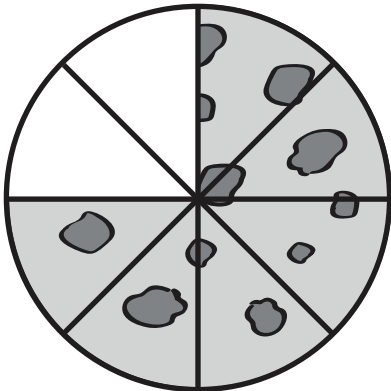
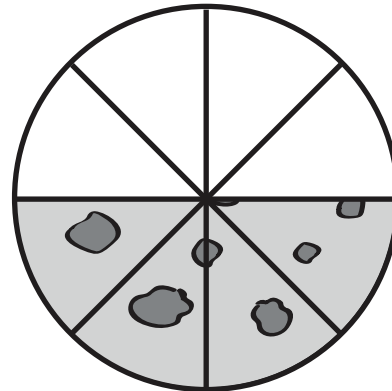

$$\frac{\square}{\square}$$


## PREVIEW

Please login or register to download the printable version of this worksheet.

[www.allkidsnetwork.com](http://www.allkidsnetwork.com)

3.


$$\frac{\square}{\square}$$

$$\frac{\square}{\square}$$