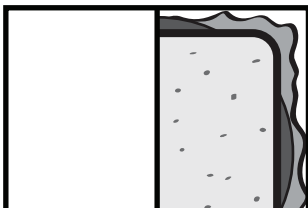


Name _____

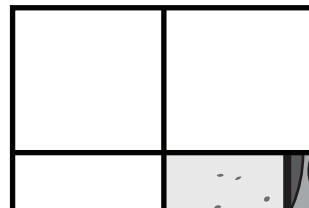
Food Fractions

Write the correct number for the numerator and denominator.

1.


$$\frac{\square}{\square}$$

2.

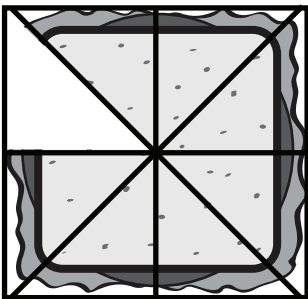
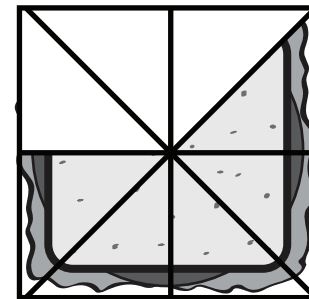

$$\frac{\square}{\square}$$


PREVIEW

Please login or register to download the printable version of this worksheet.

www.allkidsnetwork.com

3.


$$\frac{\square}{\square}$$

$$\frac{\square}{\square}$$