

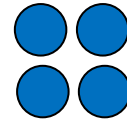
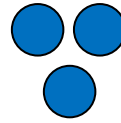


Name _____

Great Than or Less Than Worksheet



3 is **greater** than 2
 $3 > 2$



3 is **less** than 4
 $3 < 4$



Count the shapes and write the numbers. Then circle the $>$ or $<$ symbol. Remember the symbol points to the number that is less.




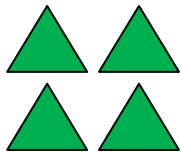
PREVIEW

Please login or register to download the printable version of this worksheet.

www.allkidsnetwork.com



_____ $>$ $<$ _____



_____ $>$ $<$ _____