

Name _____

Greater Than, Less Than

Color in the object that shows the number that is less.

1.



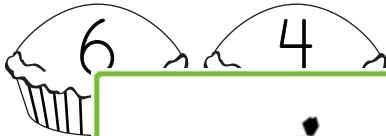
2.



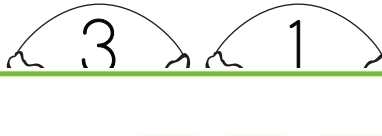
3.



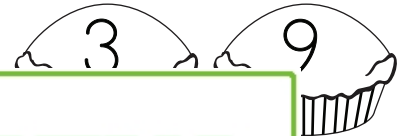
4.



5.



6.




Color in


1.



4.



5.



6.



Color in the numbers that are greater than 3 but less than 8.

