

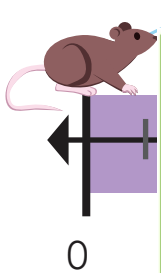
Name _____

Math Worksheets

Number Line Worksheet

Solve the following problems below using the number lines. Show your work.

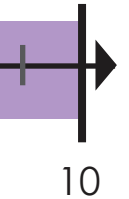
1. A mouse jumps 2 feet forward then jumps 1 foot back. If the mouse does this 5 times how far will he have jumped?



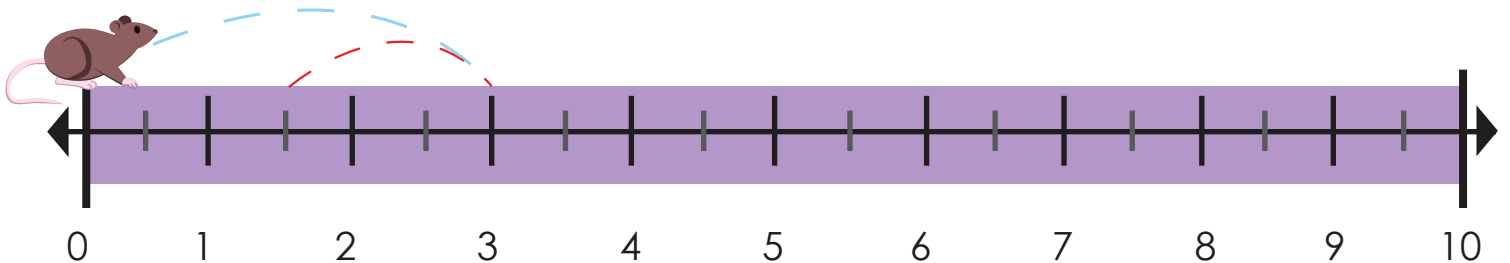
PREVIEW

Please login or register to download
the printable version of this worksheet.

www.allkidsnetwork.com



2. If the mouse jumps 3 feet forward and then 1.5 feet back how many times will the mouse have to jump to reach 6 feet?



Name _____

Math Worksheets

Number Line Answer Sheet

Solve the following problems below using the number lines. Show your work.

1. A mouse jumps 2 feet forward then jumps 1 foot back. If the mouse does this 5 times how far will he have jumped?



2. If the mouse jumps 3 feet forward and then 1.5 feet back how many times will the mouse have to jump to reach 6 feet?

