

# Number Lines Addition

Solve the following questions by drawing hops on the number line.

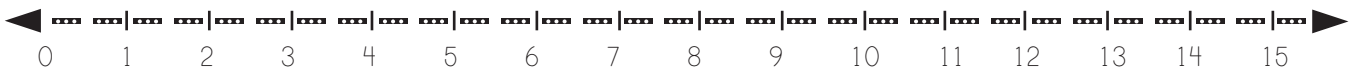


e.g.  $3+5+2 =$



$5+6+2 =$

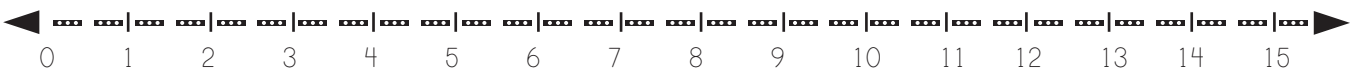
The All Kids Network logo features two cartoon children, a girl and a boy, holding a banner that says "All Kids NETWORK". To the right of the logo is a large green box with the word "PREVIEW" in bold green letters. Below "PREVIEW" is the text "Please login or register to download the printable version of this worksheet." and the website address [www.allkidsnetwork.com](http://www.allkidsnetwork.com).



$3+9+2 =$



$1+6+8 =$



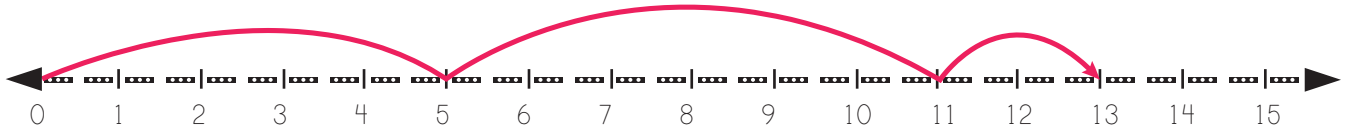
$4+0+9 =$

# Number Lines Addition

Solve the following questions by drawing hops on the number line.



e.g.  $3+5+2 = \boxed{10}$



$5+6+2 = \boxed{13}$



**All Kids**  
NETWORK

## PREVIEW

Please login or register to download  
the printable version of this worksheet.

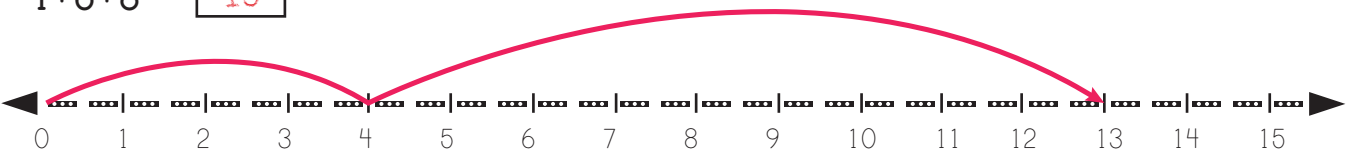
[www.allkidsnetwork.com](http://www.allkidsnetwork.com)



$3+9+2 = \boxed{14}$



$1+6+8 = \boxed{15}$



$4+0+9 = \boxed{13}$