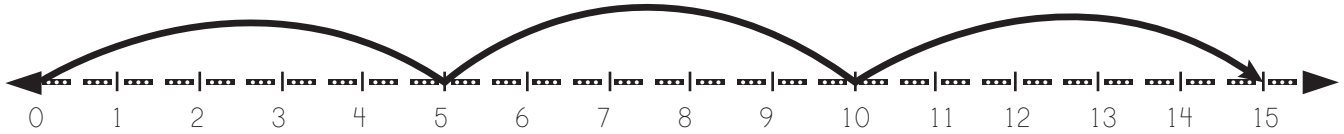
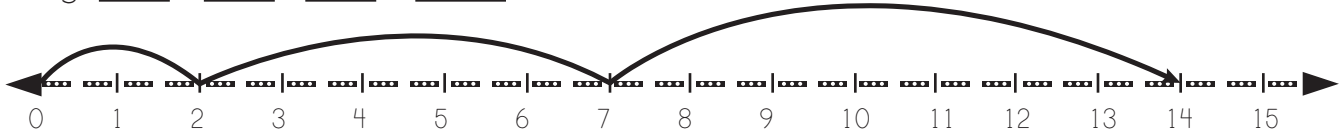


Number Lines Addition

Fill in the blanks with reference to the hops on the number line.



e.g. $\boxed{5} + \boxed{5} + \boxed{5} = \boxed{15}$

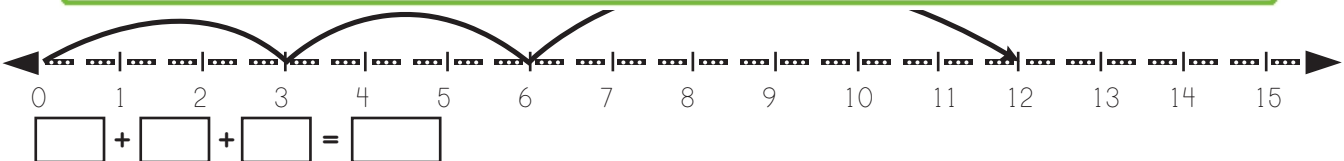


$\boxed{} + \boxed{} + \boxed{} = \boxed{}$

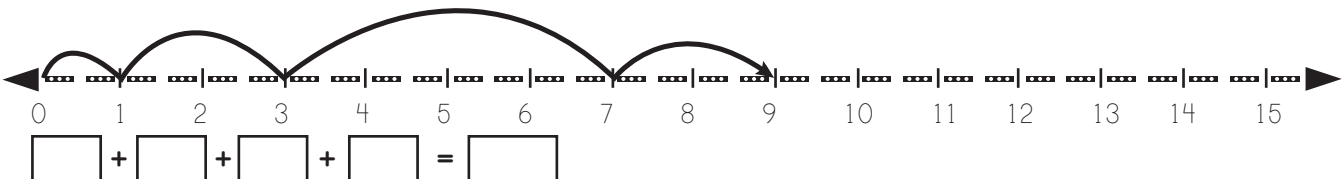
PREVIEW

Please login or register to download the printable version of this worksheet.

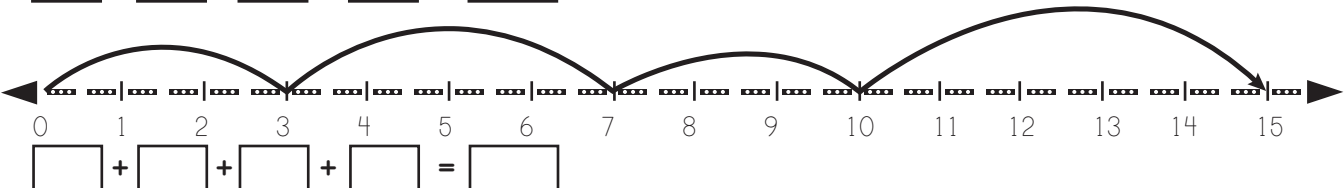
www.allkidsnetwork.com



$\boxed{} + \boxed{} + \boxed{} = \boxed{}$



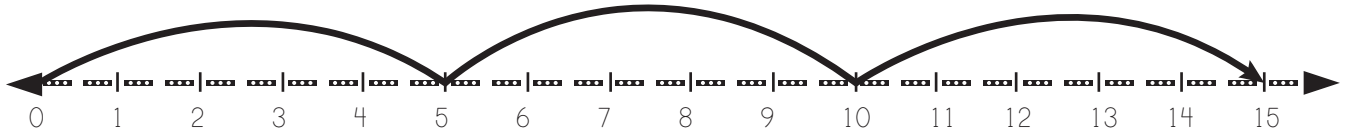
$\boxed{} + \boxed{} + \boxed{} + \boxed{} = \boxed{}$



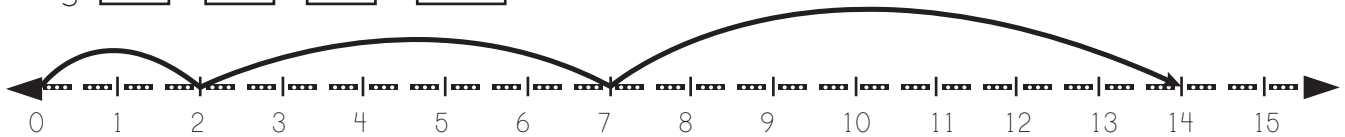
$\boxed{} + \boxed{} + \boxed{} + \boxed{} = \boxed{}$

Number Lines Addition

Fill in the blanks with reference to the hops on the number line.



e.g. $\boxed{5} + \boxed{5} + \boxed{5} = \boxed{15}$



$\boxed{2} + \boxed{5} + \boxed{7} = \boxed{14}$




All Kids
NETWORK

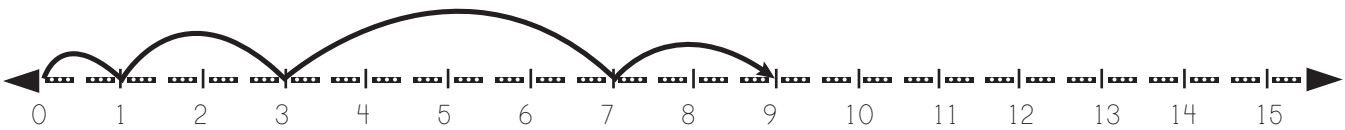
PREVIEW

Please login or register to download
the printable version of this worksheet.

www.allkidsnetwork.com



$\boxed{3} + \boxed{3} + \boxed{6} = \boxed{12}$



$\boxed{1} + \boxed{2} + \boxed{4} + \boxed{2} = \boxed{9}$



$\boxed{3} + \boxed{4} + \boxed{3} + \boxed{5} = \boxed{15}$