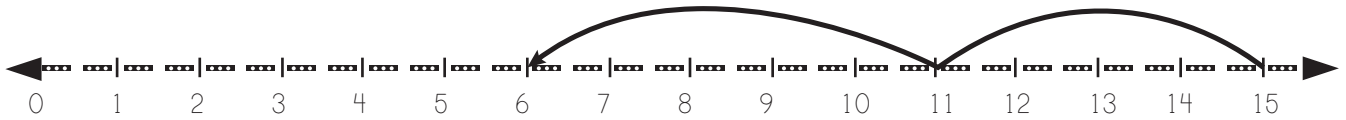
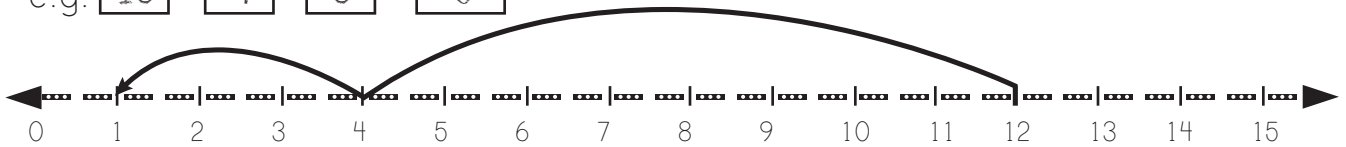


# Number Lines Subtraction

Fill in the blanks with reference to the hops on the number line.



e.g.  $\boxed{15} - \boxed{4} - \boxed{5} = \boxed{6}$



$\boxed{\phantom{00}} - \boxed{\phantom{00}} - \boxed{\phantom{00}} = \boxed{\phantom{00}}$

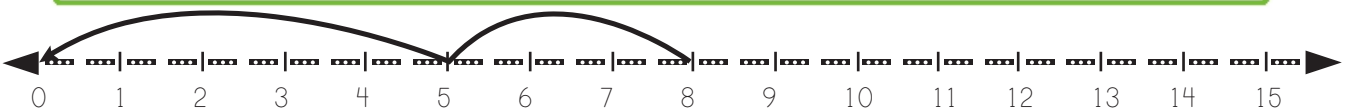


**All Kids**  
NETWORK

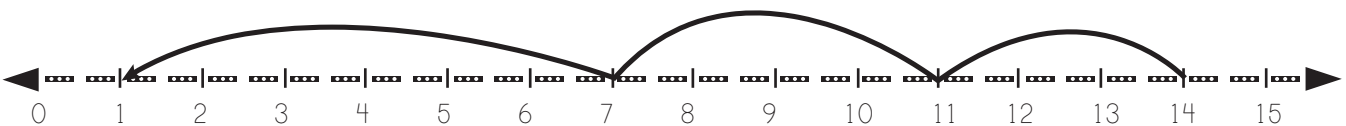
## PREVIEW

Please login or register to download  
the printable version of this worksheet.

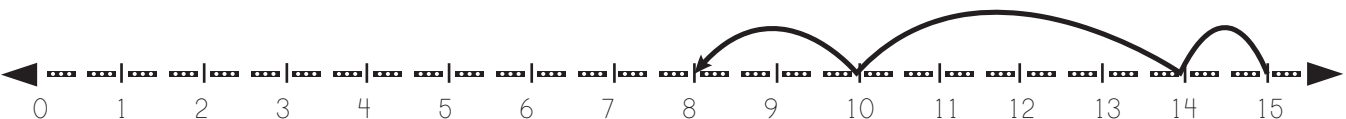
www.allkidsnetwork.com



$\boxed{\phantom{00}} - \boxed{\phantom{00}} - \boxed{\phantom{00}} = \boxed{\phantom{00}}$



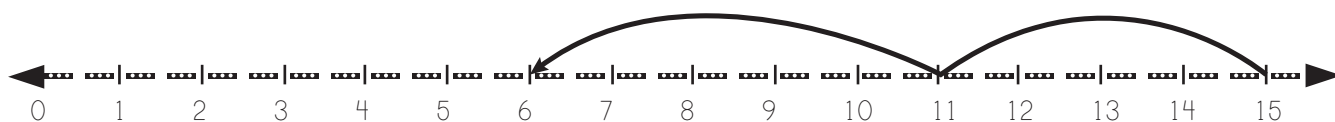
$\boxed{\phantom{00}} - \boxed{\phantom{00}} - \boxed{\phantom{00}} - \boxed{\phantom{00}} = \boxed{\phantom{00}}$



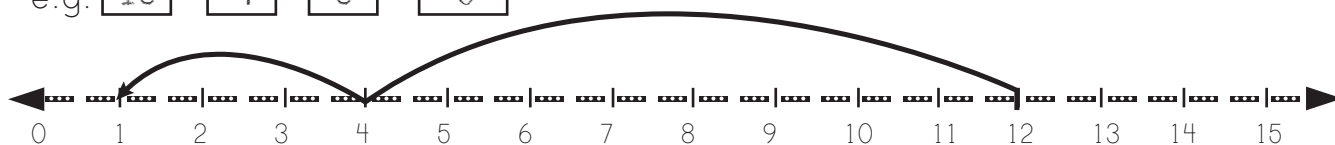
$\boxed{\phantom{00}} - \boxed{\phantom{00}} - \boxed{\phantom{00}} - \boxed{\phantom{00}} = \boxed{\phantom{00}}$

# Number Lines Subtraction

Fill in the blanks with reference to the hops on the number line.



e.g.  $\boxed{15} - \boxed{4} - \boxed{5} = \boxed{6}$



$\boxed{12} - \boxed{8} - \boxed{3} = \boxed{1}$



## PREVIEW

Please login or register to download  
the printable version of this worksheet.

[www.allkidsnetwork.com](http://www.allkidsnetwork.com)



$\boxed{8} - \boxed{3} - \boxed{5} = \boxed{0}$



$\boxed{14} - \boxed{7} - \boxed{4} - \boxed{1} = \boxed{2}$



$\boxed{15} - \boxed{1} - \boxed{4} - \boxed{2} = \boxed{8}$