

Name \_\_\_\_\_

Math Worksheets

# Rounding Worksheet

Solve the following problems below by rounding. Show your work.

How much faster was Person A than Person B?  
Round the final answer to the nearest tenth.



## PREVIEW

Please login or register to download  
the printable version of this worksheet.

[www.allkidsnetwork.com](http://www.allkidsnetwork.com)

5.25 seconds

5.34 seconds

$5.34 - 5.25 =$  \_\_\_\_\_ s

3.06 seconds



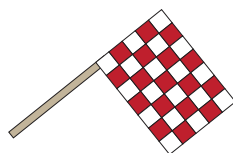

3.30 seconds

$3.30 - 3.06 =$  \_\_\_\_\_ s

4.51 seconds

5.20 seconds

$5.20 - 4.51 =$  \_\_\_\_\_ s



Name \_\_\_\_\_

Math Worksheets

# Rounding Answer Sheet

Solve the following problems below by rounding. Show your work.

How much faster was Person A than Person B?  
Round the final answer to the nearest tenth.



## PREVIEW

Please login or register to download  
the printable version of this worksheet.

[www.allkidsnetwork.com](http://www.allkidsnetwork.com)

5.25 seconds

5.34 seconds

$5.34 - 5.25 = \underline{0.10}$  s

3.06 seconds

3.30 seconds

$3.30 - 3.06 = \underline{0.20}$  s

4.51 seconds

5.20 seconds

$5.20 - 4.51 = \underline{0.70}$  s

