



Subtraction

Name _____

Math Worksheets

Subtraction Equations

Look at the number of shapes in the story problems below and write the subtraction equation below it.



$$\underline{\hspace{2cm}} - \underline{\hspace{2cm}} = \underline{\hspace{2cm}}$$


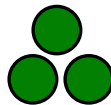



PREVIEW

Please login or register to download the printable version of this worksheet.

www.allkidsnetwork.com

$$\underline{\hspace{2cm}} - \underline{\hspace{2cm}} = \underline{\hspace{2cm}}$$



$$\underline{\hspace{2cm}} - \underline{\hspace{2cm}} = \underline{\hspace{2cm}}$$