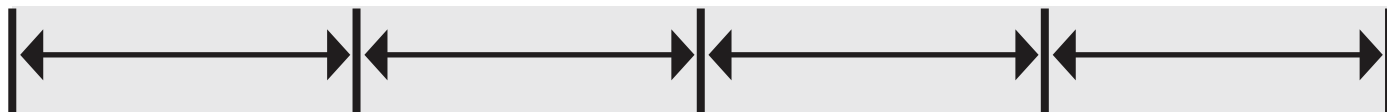





Name \_\_\_\_\_

# Customary Units

Answer the questions below using the image.



1. V  
How



## PREVIEW

Please login or register to download  
the printable version of this worksheet.

[www.allkidsnetwork.com](http://www.allkidsnetwork.com)

aments.

2. Margarita puts 1 present in a stocking, how many snowflake ornaments can she fit in the remaining space of the stocking?

\_\_\_\_\_ snowflakes

3. Megan wants to trade 6 snowflake ornaments for Billy's round ornaments. How many round ornaments would be equal to 6 snowflake ornaments?

\_\_\_\_\_ ornaments