





Name _____

Customary Units

Answer the questions below using the image.



1. J



PREVIEW

Please login or register to download the printable version of this worksheet.

www.allkidsnetwork.com

s?

2. Michael rakes 3 handfuls of leaves. In the pile of leaves are also 5 acorns. How many ounces did he rake all together?

_____ OZ

3. Ollie wants to trade a pumpkin for 2 apples. What does he need to add to have an equal weight to make the trade fair?
