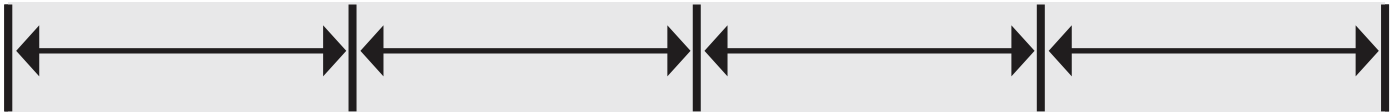

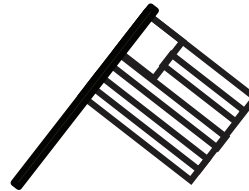



Name _____

Customary Units

Answer the questions below using the image.



1. S



PREVIEW

Please login or register to download the printable version of this worksheet.

www.allkidsnetwork.com

2. Connie wants a flag and a sparkler. How many inches are they all together?

_____ in

3. Amy has 2 burgers and 5 flags. How many more burgers does she need to be the same length as the 5 flags?

_____ burgers