




Name _____

Customary Units

Answer the questions below using the image.



1. 5
lady
length



PREVIEW

Please login or register to download
the printable version of this worksheet.

www.allkidsnetwork.com

many
same

2. If there are 3 bees and 1 butterfly in a garden than how long is their length all together?

_____ in

3. How many ladybug(s) does it take to equal the length of the flowers?

_____ ladybug(s)