
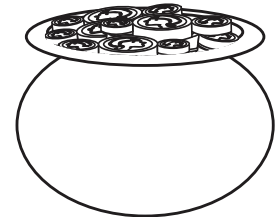





Name _____

Customary Units

Answer the questions below using the image.



1. A
inch



PREVIEW

Please login or register to download
the printable version of this worksheet.

www.allkidsnetwork.com

d 10

2. Yuri has 3 clovers and Jenna has a hat. Jenna wants to trade for the 3 clovers.
What does Jenna need to add in order to make it a fair trade?

3. Lisa finds 3 coins and 2 clovers. How many inches of clovers and coins did she
find all together?

_____ in