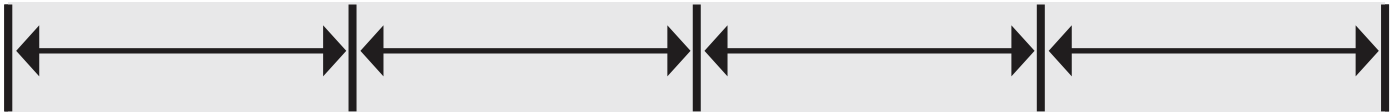




Name _____

Customary Units

Answer the questions below using the image.



1. P
cho



PREVIEW

Please login or register to download
the printable version of this worksheet.

www.allkidsnetwork.com

d
al trade?

2. Rickie makes 4 cards and gives them away. How many inches were the cards all together?

_____ in

3. Greg gives out 2 roses and receives 2 cards and 4 chocolates. How many more cards should he get for the length to be equal?

_____ cards