
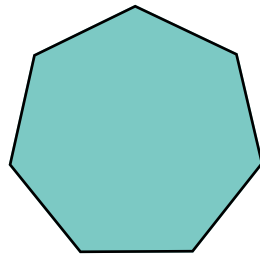




Name _____

Math Geometry Worksheet

2-Dimensional Shapes - Regular Polygons I

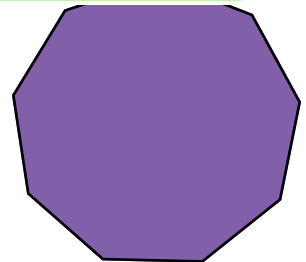
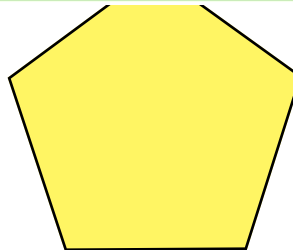
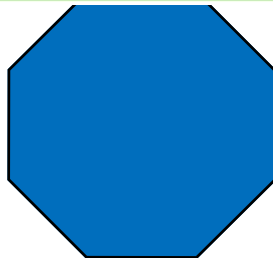

A Regular polygon is a polygon that is equiangular (all angles are equal in measure) and equilateral (all sides have the same length). Count the number of sides of each polygon and write your answer in the box provided.



PREVIEW

Please login or register to download the printable version of this worksheet.

www.allkidsnetwork.com



Decagon

Octagon

Pentagon

Nonagon