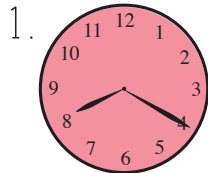



Telling Time - How to say time?

Circle the correct answer according to the time shown on the clocks. There may be more than one correct answers.




- a. Half past eight
- b. Eight twenty
- c. Twenty past eight



- a. One forty-five
- b. Quarter to two
- c. Two forty-five



- a. Four fifty
- b. Four ten



- a. Seven ten
- b. Seven o'clock


5




PREVIEW

Please login or register to download the printable version of this worksheet.


www.allkidsnetwork.com



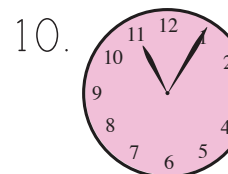
- a. Quarter to seven
- b. Half past seven
- c. Six thirty



- a. Ten eleven
- b. Five to Ten
- c. Nine Fifty-five




- a. Half past two
- b. Two twenty-five
- c. Twenty-five past two




- a. Eleven O-five
- b. Five past eleven
- c. Eleven o'clock

Telling Time - How to say time?

Circle the correct answer according to the time shown on the clocks. There may be more than one correct answers.




- a. Half past eight
 b. Eight twenty
 c. Twenty past eight



- a. One forty-five
 b. Quarter to two
 c. Two forty-five



- a. Four fifty
 b. Four ten



- a. Seven ten
 b. Seven o'clock


5.




PREVIEW

Please login or register to download the printable version of this worksheet.


www.allkidsnetwork.com



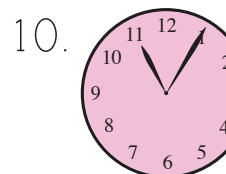
- a. Quarter to seven
 b. Half past seven
 c. Six thirty



- a. Ten eleven
 b. Five to Ten
 c. Nine Fifty-five



- a. Half past two
 b. Two twenty-five
 c. Twenty-five past two



- a. Eleven O-five
 b. Five past eleven
 c. Eleven o'clock