



# What time is it?

There are a couple different ways to tell the time. Circle the time that matches with the clock.

1.  a. 4:00 P.M.  
b. 14:00  
c. Three o'clock

2.  a. 7:00 P.M.  
b. 17:00  
c. Six o'clock

3.  a. 20:00  
b. 8:00 A.M.


4.  a. 13:30  
b. 15:30





## PREVIEW


Please login or register to download the printable version of this worksheet.

[www.allkidsnetwork.com](http://www.allkidsnetwork.com)

7.  a. 10:30  
b. 22:30  
c. Ten fifteen


8.  a. Twelve o'clock  
b. 00:15  
c. 12:30 P.M.


9.  a. 21:00  
b. 9:00 A.M.  
c. Nine in the morning

10.  a. 2:00 A.M.  
b. 14:10  
c. 2:12 P.M.

# What time is it?

There are a couple different ways to tell the time. Circle the time that matches with the clock.


1.  a. 4:00 P.M.  
b. 14:00  
c. Three o'clock


2.  a. 7:00 P.M.  
b. 17:00  
c. Six o'clock


3.  a. 20:00  
b. 8:00 A.M.


4.  a. 13:30  
b. 15:30

5.  **PREVIEW**  
Please login or register to download the printable version of this worksheet.  
[www.allkidsnetwork.com](http://www.allkidsnetwork.com)

7.  a. 10:30  
b. 22:30  
c. Ten fifteen

8.  a. Twelve o'clock  
b. 00:15  
c. 12:30 P.M.

9.  a. 21:00  
b. 9:00 A.M.  
c. Nine in the morning

10.  a. 2:00 A.M.  
b. 14:10  
c. 2:12 P.M.