
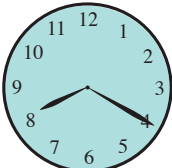


What time is it?

There are a couple different ways to tell the time. Circle the time that matches with the clock.

1.  a. 10:11
b. 21:55
c. 9:50 A.M.

2.  a. Eight forty
b. 20:20
c. 8:40 P.M.

3.  a. 7:10 A.M.
b. 19:20

4.  a. 11:05
b. 11:01 A.M.




PREVIEW


Please login or register to download the printable version of this worksheet.

www.allkidsnetwork.com

7.  a. Four thirty
b. 04:15
c. 3:40 P.M.



8.  a. 2:25 A.M.
b. 14:50
c. 02:05

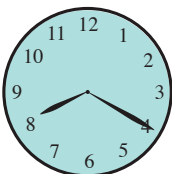

9.  a. 6:30 A.M.
b. 18:06
c. 7:30 P.M.

10.  a. 11:35 P.M.
b. 10:35 A.M.
c. 22:35

What time is it?

There are a couple different ways to tell the time. Circle the time that matches with the clock.

1.   a. 10:11
 b. 21:55
 c. 9:50 A.M.

2.   a. Eight forty
 b. 20:20
 c. 8:40 P.M.

3.   a. 7:10 A.M.
 b. 19:20



4.   a. 11:05
 b. 11:01 A.M.





PREVIEW



Please login or register to download the printable version of this worksheet.

www.allkidsnetwork.com

7.   a. Four thirty
 b. 04:15
 c. 3:40 P.M.

8.   a. 2:25 A.M.
 b. 14:50
 c. 02:05

9.   a. 6:30 A.M.
 b. 18:06
 c. 7:30 P.M.

10.   a. 11:35 P.M.
 b. 10:35 A.M.
 c. 22:35