




Name _____

Fall Math Worksheet - Subtraction

Look at the number of fall pictures in the story problems below and write the subtraction equation below it.



$$\underline{\quad\quad\quad} - \underline{\quad\quad\quad} = \underline{\quad\quad\quad}$$





PREVIEW

Please login or register to download the printable version of this worksheet.

www.allkidsnetwork.com

$$\underline{\quad\quad\quad} - \underline{\quad\quad\quad} = \underline{\quad\quad\quad}$$



$$\underline{\quad\quad\quad} - \underline{\quad\quad\quad} = \underline{\quad\quad\quad}$$